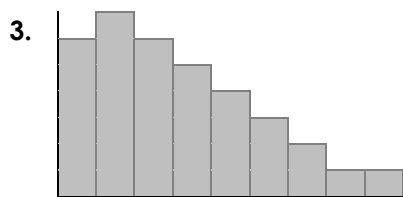
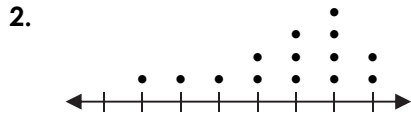



Quiz 142

Describe the shape of each distribution.



Use the graphs above to answer the question.

4. What is the better measure of central tendency for the box-and-whisker plot above, median or mean?

5. What is the better measure of variability for the dot plot above, standard deviation or interquartile range?