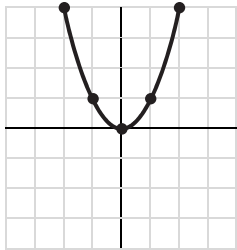
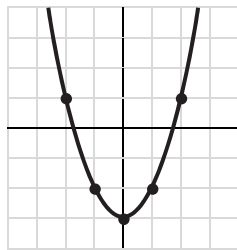


LESSON 115 ANSWERS

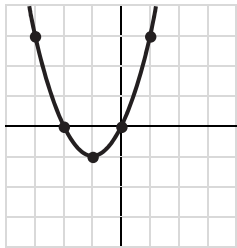
1. Vertex: (0, 0)
Axis of symmetry: $x = 0$



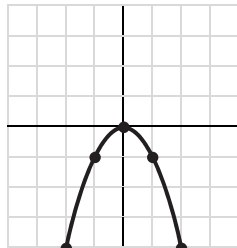
2. Vertex: (0, -3)
Axis of symmetry: $x = 0$



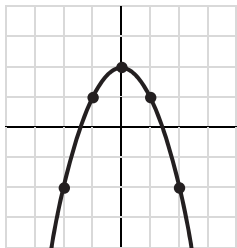
3. Vertex: (-1, -1)
Axis of symmetry: $x = -1$



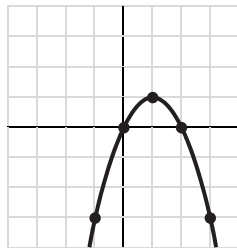
4. Vertex: (0, 0)
Axis of symmetry: $x = 0$



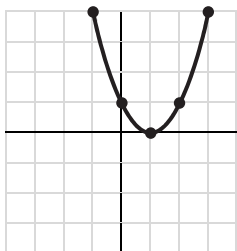
5. Vertex: (0, 2)
Axis of symmetry: $x = 0$



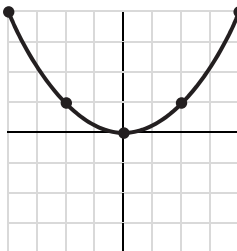
6. Vertex: (1, 1)
Axis of symmetry: $x = 1$



7. Vertex: (1, 0)
Axis of symmetry: $x = 1$



8. Vertex: (0, 0)
Axis of symmetry: $x = 0$



9. Vertex: (0, 4)
Axis of symmetry: $x = 0$

